

Example 1:

How much tension is in a string connected to a 0.25 kg ball that is being swung in horizontal circle with a radius of 1.5 meters, if the ball makes two revolutions per second?

Example 1:

$$m = 0.25 \text{ kg}, r = 1.5 \text{ m}, \text{ and } \omega = 2 \frac{\text{rev}}{\text{s}}, T = ?$$

$$v = 2 \frac{\text{rev}}{\text{s}} \left(\frac{2\pi(1.5 \text{ m})}{1 \text{ rev}} \right) = 18.85 \frac{\text{m}}{\text{s}}$$



$$F_{\text{net}} = ma$$

$$T = m \frac{v^2}{r}$$

$$T = (0.25 \text{ kg}) \left(\frac{(18.85 \frac{\text{m}}{\text{s}})^2}{1.5 \text{ m}} \right)$$

$$T = 59.2 \text{ N}$$

Example 2:

A 2.0 kg rock is attached to the end of a 1.5 m cord with negligible mass and swung in a vertical circle at an angular speed of 1.50 rev/s.

- Find the centripetal acceleration of the rock.
- Find the highest and lowest values of the tension in the cord.
- What is the minimum speed needed in order for the rock to complete a circular path?

Example 2:

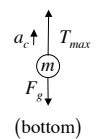
$$m = 2.0 \text{ kg}, r = 1.5 \text{ m}, \text{ and } \omega = 1.5 \frac{\text{rev}}{\text{s}}$$

a.) $a_c = ?$

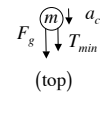
$$a_c = \frac{v^2}{r} \text{ and } v = 1.5 \frac{\text{rev}}{\text{s}} \left(\frac{2\pi(1.5 \text{ m})}{1 \text{ rev}} \right) = 14.14 \frac{\text{m}}{\text{s}}$$

$$a_c = \frac{(14.14 \frac{\text{m}}{\text{s}})^2}{1.5 \text{ m}} = 133.2 \frac{\text{m}}{\text{s}^2}$$

b.) $T_{\text{max}} = ?$ and $T_{\text{min}} = ?$



$$\begin{aligned} \vec{F}_{\text{net}} &= m\vec{a} \\ T_{\text{max}} - F_g &= ma_c \\ T_{\text{max}} &= ma_c + F_g \\ T_{\text{max}} &= ma_c + mg \\ \text{(bottom)} \quad T_{\text{max}} &= m(a_c + g) \end{aligned}$$



$$\begin{aligned} \vec{F}_{\text{net}} &= m\vec{a} \\ T_{\text{min}} + F_g &= ma_c \\ T_{\text{min}} &= ma_c - F_g \\ T_{\text{min}} &= ma_c - mg \\ T_{\text{min}} &= m(a_c - g) \end{aligned}$$

$$T_{\text{max}} = (2.0 \text{ kg}) \left(133.2 \frac{\text{m}}{\text{s}^2} + 9.8 \frac{\text{m}}{\text{s}^2} \right)$$

$$T_{\text{max}} = 286 \text{ N}$$

$$T_{\text{min}} = (2.0 \text{ kg}) \left(133.2 \frac{\text{m}}{\text{s}^2} - 9.8 \frac{\text{m}}{\text{s}^2} \right)$$

$$T_{\text{min}} = 247 \text{ N}$$

Example 2:

$$m = 2.0 \text{ kg}, r = 1.5 \text{ m}, \text{ and } \omega = 1.5 \frac{\text{rev}}{\text{s}}$$

c.) minimum speed to complete circle $v = ?$

The minimum speed v is when $T = 0$.

This happens at the top where:

$$T = m(a_c - g)$$

$$0 = m \left(\frac{v^2}{r} - g \right)$$

$$\frac{v^2}{r} - g = 0$$

$$v = \sqrt{gr}$$

$$v = \sqrt{\left(9.8 \frac{\text{m}}{\text{s}^2} \right) (1.5 \text{ m})}$$

$$v = 3.83 \frac{\text{m}}{\text{s}}$$

Example 3:

A girl has a mass of 65 kg and is riding on The Demon at Great America. She experiences an acceleration of 15.0 m/s² at the top of the loop. What is the normal force? (i.e., How much force is pushing her rear end into the seat?)

Example 3:
(Roller-coaster loop)

$$m = 65 \text{ kg and } a_c = 15 \frac{\text{m}}{\text{s}^2}$$

at the top of the loop $F_N = ?$



$$\vec{F}_{net} = m\vec{a}$$

$$F_N + F_g = ma_c$$

$$F_N = ma_c - F_g$$

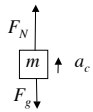
$$F_N = ma_c - mg$$

$$F_N = m(a_c - g)$$

$$F_N = (65 \text{ kg}) \left(15 \frac{\text{m}}{\text{s}^2} - 9.8 \frac{\text{m}}{\text{s}^2} \right)$$

$$F_N = 338 \text{ N}$$

Example 4:
(Roller-coaster loop) $m = 75 \text{ kg}$, $v = 25 \frac{\text{m}}{\text{s}}$, $D = 30 \text{ m}$ so $r = 15 \text{ m}$
at the bottom of the loop $F_N = ?$



$$\vec{F}_{net} = m\vec{a}$$

$$F_N - F_g = ma_c$$

$$F_N = ma_c + F_g$$

$$F_N = m \frac{v^2}{r} + mg$$

$$F_N = m \left(\frac{v^2}{r} + g \right) \text{ and } F_N = (75 \text{ kg}) \left(\frac{\left(25 \frac{\text{m}}{\text{s}} \right)^2}{15 \text{ m}} + 9.8 \frac{\text{m}}{\text{s}^2} \right)$$

$$F_N = 3860 \text{ N}$$

Example 5:
(Ferris Wheel)

$$m = 80 \text{ kg}, v = 15 \frac{\text{m}}{\text{s}}, \text{ and } r = 30 \text{ m}$$

a.) at the top of the ride $F_N = ?$



$$\vec{F}_{net} = m\vec{a}$$

$$F_g - F_N = ma_c$$

$$F_N = F_g - ma_c$$

$$F_N = mg - m \frac{v^2}{r}$$

$$F_N = m \left(g - \frac{v^2}{r} \right) \text{ and } F_N = (80 \text{ kg}) \left(9.8 \frac{\text{m}}{\text{s}^2} - \frac{\left(15 \frac{\text{m}}{\text{s}} \right)^2}{30 \text{ m}} \right)$$

$$F_N = 184 \text{ N}$$

Example 4:

How much force would you feel against your derrière at the bottom of a roller-coaster loop with a diameter of 30 meters if your mass is 75 kg and the roller coaster car is traveling at 25 m/s?

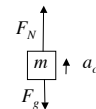
Example 5:

- How much force would you feel against your derrière at the top of a Ferris wheel with a radius of 30 meters if your mass is 80 kg and the Ferris wheel's speed is 15 m/s?
- Assuming the same conditions as in (a), what force would you feel at the bottom of the ride?
- What is the maximum speed for the Ferris wheel?

Example 5:
(Ferris Wheel)

$$m = 80 \text{ kg}, v = 15 \frac{\text{m}}{\text{s}}, \text{ and } r = 30 \text{ m}$$

b.) at the bottom of the ride $F_N = ?$



$$\vec{F}_{net} = m\vec{a}$$

$$F_N - F_g = ma_c$$

$$F_N = ma_c + F_g$$

$$F_N = m \frac{v^2}{r} + mg$$

$$F_N = m \left(\frac{v^2}{r} + g \right) \text{ and } F_N = (80 \text{ kg}) \left(\frac{\left(15 \frac{\text{m}}{\text{s}} \right)^2}{30 \text{ m}} + 9.8 \frac{\text{m}}{\text{s}^2} \right)$$

$$F_N = 1384 \text{ N}$$

Example 5:
(Ferris Wheel)

$$m = 80 \text{ kg}, v = 15 \frac{\text{m}}{\text{s}}, \text{ and } r = 30 \text{ m}$$

c.) maximum safe speed $v = ?$

The maximum safe speed v is when $F_N = 0$.

This happens at the top where:

$$F_N = m \left(g - \frac{v^2}{r} \right)$$

$$0 = m \left(g - \frac{v^2}{r} \right)$$

$$g - \frac{v^2}{r} = 0$$

$$v = \sqrt{gr}$$

$$v = \sqrt{\left(9.8 \frac{\text{m}}{\text{s}^2} \right) (30 \text{ m})}$$

$$v = 17.15 \frac{\text{m}}{\text{s}}$$

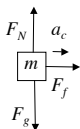
Example 6:

A flat curve on a highway has radius of 240 m. A car rounds the curve at a speed of 32 m/s. What is the minimum coefficient of friction that will prevent skidding.

Example 6:
(Curved Road)

$$r = 240 \text{ m and } v = 32 \frac{\text{m}}{\text{s}}$$

$\mu = ?$



$$F_{net} = m\bar{a}$$

$$\sum F_y = ma \quad \sum F_x = ma$$

$$F_N - F_g = 0 \quad F_f = ma_c$$

$$F_N = F_g \quad \mu F_N = ma_c$$

$$F_N = mg \quad \mu mg = ma_c$$

$$\mu = \frac{a_c}{g}$$

$$\mu = \frac{\left(\frac{v^2}{r} \right)}{g} = \frac{v^2}{gr}$$

$$\mu = \frac{\left(32 \frac{\text{m}}{\text{s}} \right)^2}{\left(9.8 \frac{\text{m}}{\text{s}^2} \right) (240 \text{ m})} \quad \text{and } \mu = 0.44$$